



















◇◇ <地図記号 練習問題> No. 2 ◇◇

・次の記号は何を表す地図記号か答えなさい。

- | | | | | | |
|------|---|-----|------|---|-----|
| (1) |  | () | (2) |  | () |
| (3) |  | () | (4) |  | () |
| (5) |  | () | (6) |  | () |
| (7) |  | () | (8) |  | () |
| (9) |  | () | (10) |  | () |
| (11) |  | () | (12) |  | () |
| (13) |  | () | (14) |  | () |
| (15) |  | () | (16) |  | () |
| (17) |  | () | (18) |  | () |
| (19) | Λ | () | (20) | 山 | () |
| | Λ Λ | () | | 山 山 | () |
| (21) | \therefore | () | (22) | Υ | () |
| | \therefore \therefore | () | | Υ Υ | () |
| (23) | Q | () | (24) | O | () |
| | Q Q | () | | O O | () |