











































◇◇ <地図記号 練習問題> No. 1 ◇◇

・次の記号は何を表す地図記号か答えなさい。

- |      |   |     |      |   |     |
|------|---|-----|------|---|-----|
| (1)  |    | ( ) | (2)  |    | ( ) |
| (3)  |    | ( ) | (4)  |    | ( ) |
| (5)  |    | ( ) | (6)  |    | ( ) |
| (7)  |    | ( ) | (8)  |    | ( ) |
| (9)  |    | ( ) | (10) |    | ( ) |
| (11) |  | ( ) | (12) |  | ( ) |
| (13) |  | ( ) | (14) |  | ( ) |
| (15) |  | ( ) | (16) |  | ( ) |
| (17) |  | ( ) | (18) |  | ( ) |
| (19) |  | ( ) | (20) |  | ( ) |
| (21) |  | ( ) | (22) |  | ( ) |
| (23) |  | ( ) | (24) |  | ( ) |

◇◇ <地図記号 練習問題> No. 2 ◇◇

・次の記号は何を表す地図記号か答えなさい。

- |      |   |     |      |   |     |
|------|---|-----|------|---|-----|
| (1)  |    | ( ) | (2)  |    | ( ) |
| (3)  |    | ( ) | (4)  |    | ( ) |
| (5)  |    | ( ) | (6)  |    | ( ) |
| (7)  |    | ( ) | (8)  |    | ( ) |
| (9)  |    | ( ) | (10) |    | ( ) |
| (11) |  | ( ) | (12) |  | ( ) |
| (13) |  | ( ) | (14) |  | ( ) |
| (15) |  | ( ) | (16) |  | ( ) |
| (17) |  | ( ) | (18) |  | ( ) |
| (19) | $\Lambda$   | ( ) | (20) | $\text{山}$  | ( ) |
|      | $\Lambda$ $\Lambda$   | ( ) |      | $\text{山}$ $\text{山}$   | ( ) |
| (21) | $\therefore$  | ( ) | (22) | $\Upsilon$  | ( ) |
|      | $\therefore$ $\therefore$   | ( ) |      | $\Upsilon$ $\Upsilon$   | ( ) |
| (23) | $\text{Q}$  | ( ) | (24) | $\text{O}$  | ( ) |
|      | $\text{Q}$ $\text{Q}$   | ( ) |      | $\text{O}$ $\text{O}$   | ( ) |